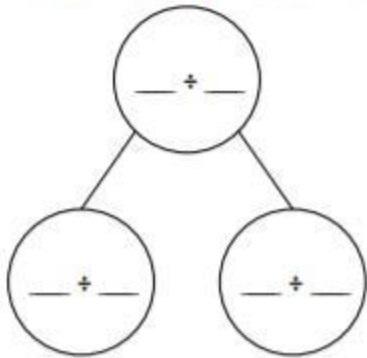
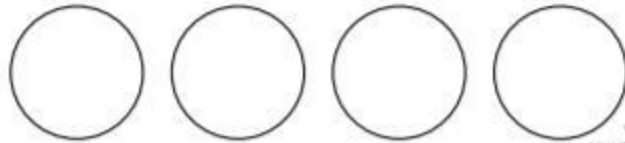
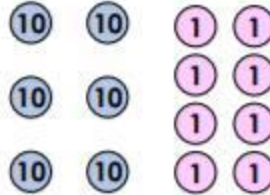


Divide 2 Digits by 1 Digit 2

7. Complete the part-whole model and solve the calculation.



$$\square \div \square = \square$$



VF
HW/Ext

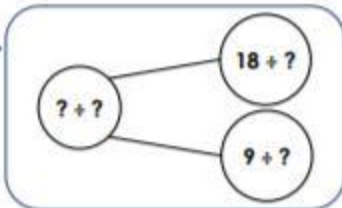
8. Match the calculations to their representations to complete the missing numbers.

A. $\square \div 5 = \square$

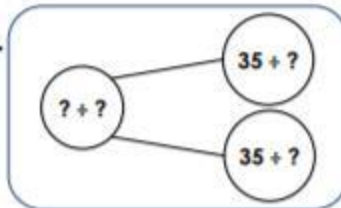
B. $\square \div 3 = \square$

C. $\square \div 4 = \square$

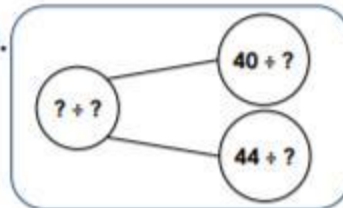
1.



2.



3.



VF
HW/Ext

9. Sam and Anna are trying to solve the calculation below.

$$\square 96 \div \square 4 \div \square 3 = \square ?$$



The answer is 4.



The answer is 8.

Who is correct? Explain your answer.



RPS
HW/Ext